



# Tell the Time: Writing the Time


Write the time that is **1 hour before** the time on each clock.



\_\_\_\_\_




\_\_\_\_\_




\_\_\_\_\_


Write the time that is **1 hour after** the time on each clock.



\_\_\_\_\_




\_\_\_\_\_




\_\_\_\_\_


Write the time that is **2 hours before** the time on each clock.



\_\_\_\_\_




\_\_\_\_\_




\_\_\_\_\_


Write the time that is **2 hours after** the time on each clock.



\_\_\_\_\_




\_\_\_\_\_




\_\_\_\_\_

# Tell the Time: Drawing the Time


Draw the time on each clock that is **1 hour before** the given time.



4 o'clock




half past 1




10 o'clock


Draw the time on each clock that is **1 hour after** the given time.



9 o'clock




half past 2




half past 11


Draw the time on each clock that is **2 hours before** the given time.



3 o'clock




half past 12




6 o'clock


Draw the time on each clock that is **2 hours after** the given time.



half past 7




half past 5




8 o'clock

# Writing the Time Answers


Write the time that is **1 hour before** the time on each clock.



7 o'clock




half past 3




11 o'clock


Write the time that is **1 hour after** the time on each clock.



1 o'clock




half past 6




half past 4


Write the time that is **2 hours before** the time on each clock.



8 o'clock




half past 2




6 o'clock


Write the time that is **2 hours after** the time on each clock.



half past 5




half past 12




9 o'clock

# Drawing the Time Answers


Draw the time on each clock that is **1 hour before** the given time.



4 o'clock




half past 1




10 o'clock


Draw the time on each clock that is **1 hour after** the given time.



9 o'clock




half past 2




half past 11


Draw the time on each clock that is **2 hours before** the given time.



3 o'clock




half past 12




6 o'clock


Draw the time on each clock that is **2 hours after** the given time.



half past 7



half past 5



8 o'clock