

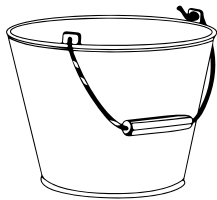
Name _____

Date _____

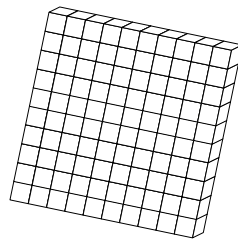
Which Objects Have Capacity?

Capacity is the amount that a container will hold.


Look carefully at the pictures below. Use a crayon to colour the objects that have capacity.




bucket




MAB hundreds block



cup



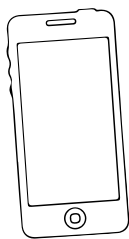
piece of wood




jug



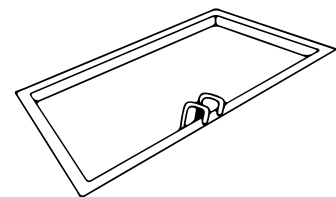
spoon



phone



trash can



swimming pool

Name _____

Date _____

Which Objects Have Capacity?

Different sized containers have different capacities.

Cut out the objects with capacity that you coloured (on the previous page). Arrange them in order from the smallest capacity to the largest. Paste them in the table below in ascending order (from 1-6).

1. smallest capacity	2.
3.	4.
5.	6. largest capacity




Answers


1. smallest capacity




2.



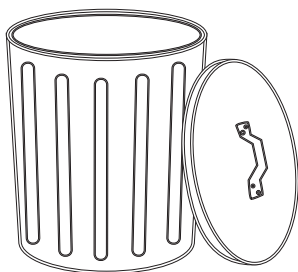
3.



4.



5.



6. largest capacity

