


Name _____

Date _____


Length - Informal Units

① Use the squares to measure the length of the objects.









Item	Length
pencil	_____ squares
pop stick	_____ squares
spoon	_____ squares




② Circle the longest item in green and the shortest item in red.

③ Put a 1 in the box next to the object that is the shortest. Then write a 2 beside the next shortest object. Keep going until all the objects are numbered.



Answers

- ① Use the squares to measure the length of the objects.



Item	Length
pencil	12 squares
pop stick	7 squares
spoon	10 squares

- ② Circle the longest item in green and the shortest item in red.
- ③ Put a 1 in the box next to the object that is the shortest. Then write a 2 beside the next shortest object. Keep going until all the objects are numbered.