

# Test Year 2 W5

Wednesday, 29 April 2020 7:30 PM



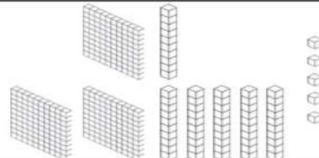
Test Year 2- Week 5

Name: \_\_\_\_\_

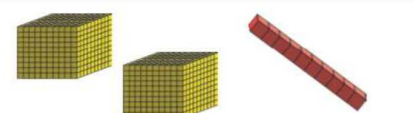

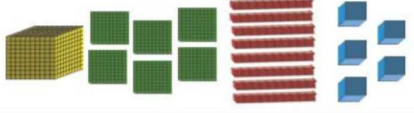


Date: \_\_\_\_\_

Class: \_\_\_\_\_

I. Fill in the necessary information. Draw MABs for picture.

Number	Words	Expanded Form	Picture
_____	____ hundreds ____ tens ____ ones	$500 + 40 + 1$ = _____	
_____	2 hundreds 6 tens 1 ones	_____ + _____ + _____ = _____	
824	____ hundreds ____ tens ____ ones	_____ + _____ + _____ = _____	
_____	____ hundreds ____ tens ____ ones	_____ + _____ + _____ = _____	



2. Count the group of blocks and record the total amount.

	_____ Thousands _____ Hundreds _____ Tens _____ Ones _____ + _____ + _____ + _____ = _____
	_____ Thousands _____ Hundreds _____ Tens _____ Ones _____ + _____ + _____ + _____ = _____
	_____ Thousands _____ Hundreds _____ Tens _____ Ones _____ + _____ + _____ + _____ = _____
	_____ Thousands _____ Hundreds _____ Tens _____ Ones _____ + _____ + _____ + _____ = _____
	_____ Thousands _____ Hundreds _____ Tens _____ Ones _____ + _____ + _____ + _____ = _____

3. Answer the following using your thinkboards.

a. 20 people are sunbathing and 7 people went for a swim. How many people were left sunbathing?



Thinkboard

<i>Picture</i>	<i>Tens Frame</i>																				
 	<table border="1"><tr><td></td><td></td><td></td><td></td><td></td></tr><tr><td></td><td></td><td></td><td></td><td></td></tr><tr><td></td><td></td><td></td><td></td><td></td></tr><tr><td></td><td></td><td></td><td></td><td></td></tr></table>																				
<i>Number Sentence</i>	<i>Part-Part Whole</i>																				
	<table border="1"><tr><td></td><td></td></tr><tr><td colspan="2"></td></tr></table>																				

b. 6 children are jogging in the park and 7 were playing on the equipment.

How many children are in the park?

Thinkboard

<i>Picture</i>	<i>Tens Frame</i>																				
 	<table border="1"><tr><td></td><td></td><td></td><td></td><td></td></tr><tr><td></td><td></td><td></td><td></td><td></td></tr><tr><td></td><td></td><td></td><td></td><td></td></tr><tr><td></td><td></td><td></td><td></td><td></td></tr></table>																				
<i>Number Sentence</i>	<i>Part-Part Whole</i>																				
	<table border="1"><tr><td></td><td></td></tr><tr><td colspan="2"></td></tr></table>																				