

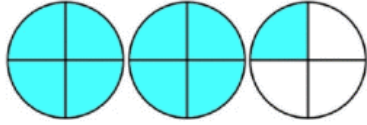

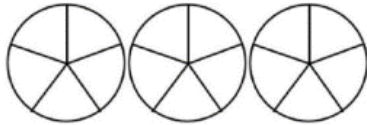
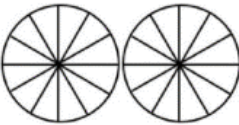

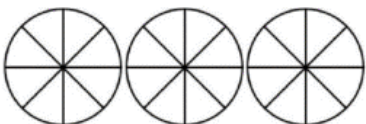
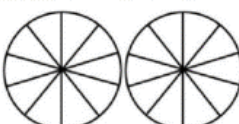
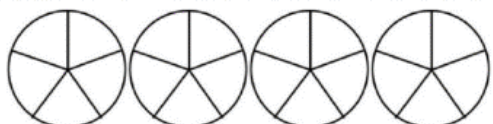
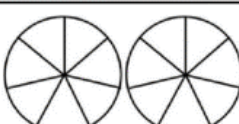
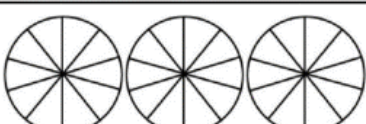

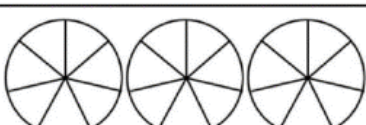
Name

Date



CONVERT IMPROPER FRACTIONS SHEET 2

Shade the fraction diagrams to work out the missing number. The first one is done for you.

1)  $2 \frac{1}{4} = \frac{9}{4}$	7)  $\frac{13}{6} =$
2)  $\frac{12}{5} =$	8)  $1 \frac{5}{12} =$
3)  $3 \frac{1}{3} =$	9)  $\frac{24}{8} =$
4)  $\frac{17}{10} =$	10)  $3 \frac{4}{5} =$
5)  $1 \frac{5}{7} =$	11)  $2 \frac{7}{10} =$
6)  $3 \frac{3}{4} =$	12)  $\frac{19}{7} =$