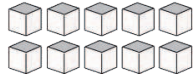
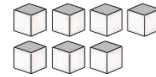


# Base Ten Blocks—Counting Units (A)

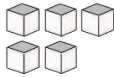
**Instructions:** Count how many units are in each group below.



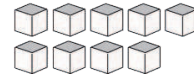
There are \_\_\_\_ units  
in this group.



There are \_\_\_\_ units  
in this group.



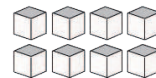
There are \_\_\_\_ units  
in this group.



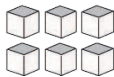
There are \_\_\_\_ units  
in this group.



There are \_\_\_\_ units  
in this group.



There are \_\_\_\_ units  
in this group.



There are \_\_\_\_ units  
in this group.



There are \_\_\_\_ units  
in this group.