



# Comparing Capacity Using Informal Units

Compare the capacity of the objects below by counting the amount of informal units each item holds.




The cup has a capacity of \_\_\_\_\_ cubes.




The bowl has a capacity of \_\_\_\_\_ cubes.

The \_\_\_\_\_ has a larger capacity because it holds more.



The teacup has a capacity of \_\_\_\_\_ marbles.



The jar has a capacity of \_\_\_\_\_ marbles.

The \_\_\_\_\_ has a smaller capacity because it holds less.