

Number Boards Yr. 2



Warm Up

Today's warm up we are going to practice our counting. Counting in 2's, 3's, 5's and 10's

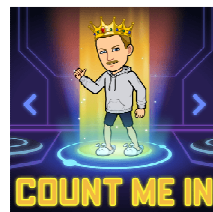

Let's start with count in 2's to 50

Press play to count with me ---->



count in 2s

**2 4 6 8 10 12 14 16 18 20 22 24 26 28 30 32 34 36
38 40 42 44 46 48 50**



Now let's count up in 3's to 30

Press play to count with me ---->



count in 3s

3 6 9 12 15 18 21 24 27 30

Time to count to 100 in 5's

Press play to count with me --->



count in 5s

**5 10 15 20 25 30 35 40 45 50 55 60 65 70 75 80 85
90 95 100**

Counting in 10's to 100

Press play to count with me --->



count in
10s

10 20 30 40 50 60 70 80 90 100

I Do

We Are Learning To: Count using a Numbers Board.

What I'm Looking For: Counting in 2's, 3's 5's and 10's to 100.

Today we're looking at the how we can use a Number Board to help us count. The first thing we need to look at is what a Number Board looks like.

1	2	3	4	5	6	7	8	9	10
11	12	13	14	15	16	17	18	19	20
21	22	23	24	25	26	27	28	29	30
31	32	33	34	35	36	37	38	39	40
41	42	43	44	45	46	47	48	49	50
51	52	53	54	55	56	57	58	59	60
61	62	63	64	65	66	67	68	69	70
71	72	73	74	75	76	77	78	79	80
81	82	83	84	85	86	87	88	89	90
91	92	93	94	95	96	97	98	99	100

For the following questions use the numbers board while you count.

Q1. **Count out loud** in ones starting at 35 to 50.

Q2. **Count out loud** in twos starting at 76 to 100.

Q3. **Count out loud** in tens starting at 41 using the numbers board.

Q4. This time while you count you need to **write down the numbers**.
Counting down in 5's from 50.

50	45	40	35	30	25	20														
15	10	5	0																	

Q5. Write down the numbers. Count up in 10's starting at 17.

17	27	37	47	57	67	77															
87	97																				

We Do

Now it's your turn, I have made a few questions under this numbers board for you to complete. Your parents can help you in this section. Write/type or upload a photo of your answers.

1	2	3	4	5	6	7	8	9	10
11	12	13	14	15	16	17	18	19	20
21	22	23	24	25	26	27	28	29	30
31	32	33	34	35	36	37	38	39	40
41	42	43	44	45	46	47	48	49	50
51	52	53	54	55	56	57	58	59	60
61	62	63	64	65	66	67	68	69	70
71	72	73	74	75	76	77	78	79	80
81	82	83	84	85	86	87	88	89	90
91	92	93	94	95	96	97	98	99	100

For the following questions use the numbers board while you count.


Q1. **Count out loud** in threes starting at 33 to 66.

Q2. **Count out loud** in fives starting at 25 to 100.

Q3. **Count out loud** in tens starting at 33 using the numbers board.

Q4. This time while you count you need to **write down the numbers**.
Counting down in 10's from 63.

Q5. Write down the numbers. Count up in 5's starting at 17.



You Do

Now it's your turn but this time on your own, I have made a few questions under this numbers board for you to complete. Write/type or upload a photo of your answers.

1	2	3	4	5	6	7	8	9	10
11	12	13	14	15	16	17	18	19	20
21	22	23	24	25	26	27	28	29	30
31	32	33	34	35	36	37	38	39	40
41	42	43	44	45	46	47	48	49	50
51	52	53	54	55	56	57	58	59	60
61	62	63	64	65	66	67	68	69	70
71	72	73	74	75	76	77	78	79	80
81	82	83	84	85	86	87	88	89	90
91	92	93	94	95	96	97	98	99	100

For the following questions use the numbers board while you count.

Q1. **Count out loud** in twos starting at 43 to 67.

Q2. **Count out loud** going backwards in ones starting at 98 to 65.

Q3. **Count out loud** in fives starting at 24 using the numbers board.

Q4. This time while you count you need to **write down the numbers**.
Counting down in 5's from 63.

Q5. Write down the numbers. Count up in 10's starting at 55.

Plough Back

Today we were learning how to use a numbers board to help you count.

We Are Learning To: Count using a Numbers Board.

What I'm Looking For: Counting in 2's, 3's 5's and 10's to 100.

Question

How many numbers is it going up by if you go directly below a number on a numbers board?

If all the numbers end in 0 or 5, What am I counting up or down in?