
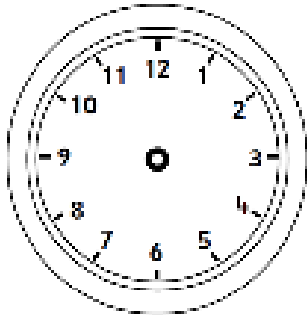

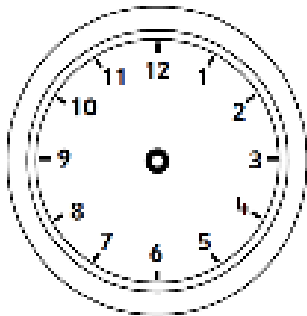

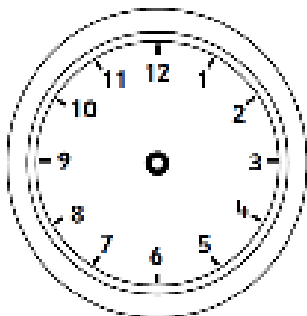

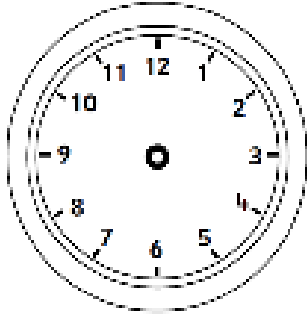


Walt: solve problems involving time

<p>Bart leaves for football at 10 o'clock. It takes him one hour to get there. What time does he get there? Draw the time on the clock.</p>		
<p>Laura goes swimming at 9 o'clock. She swims for 1 hour. What time does Laura get out of the pool? Draw the time on the clock.</p>		
<p>The Angry birds go to the cinema. They arrive at 3 o'clock. The film lasts one hour. What time do they leave the cinema?</p>		
<p>Hello Kitty goes shopping. She goes on the bus which takes one hour. If she sets off at 11 o'clock, what time does she get there?</p>		
<p>The children start dancing at 6 o'clock. They finish an hour later. What time do they finish dancing?</p>	