
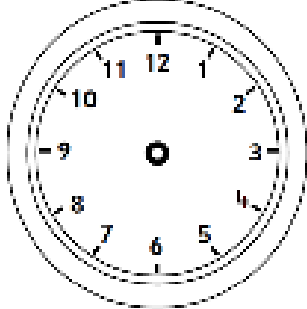

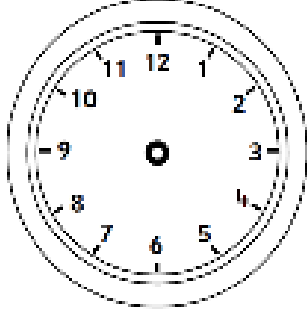

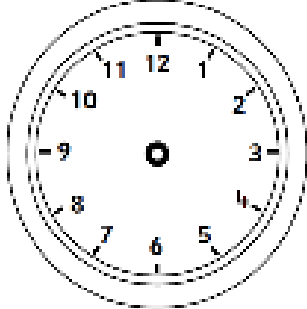

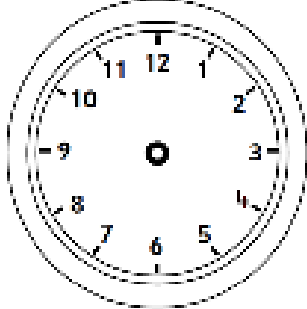


Walt: solve problems involving time

<p>Bart leaves for football at half past ten. It takes him half an hour to walk there. What time does he get there? Draw the time on the clock.</p>		
<p>Laura goes swimming at half past 9. She swims for 2 hours. What time does Laura get out of the pool? Draw the time on the clock.</p>		
<p>The Angry birds go to the cinema. They arrive at quarter past 3. The film lasts one hour. What time do they leave the cinema?</p>		
<p>Hello Kitty goes shopping. She goes on the bus which takes an hour and a half. If she gets to the shops at 11 o'clock, what time did she set off?</p>		
<p>The children start dancing at quarter past 6. They finish two hours later. What time do they finish dancing?</p>	