

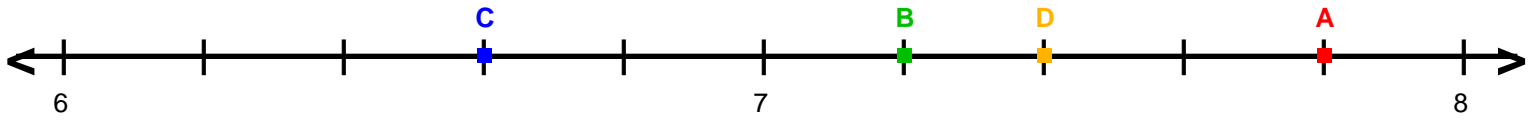
Name : _____

Score : _____

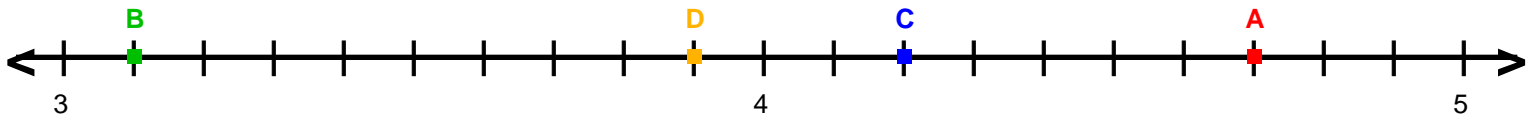
Teacher : _____

Date : _____

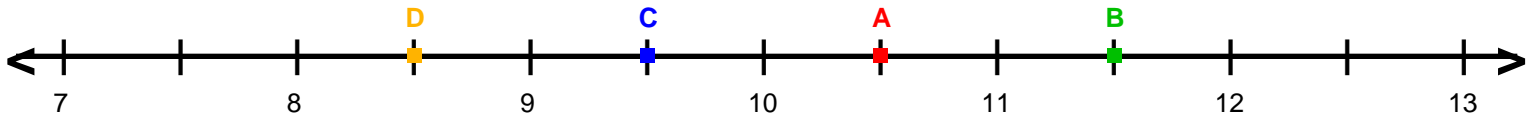
Decimal Numbers on Number Lines



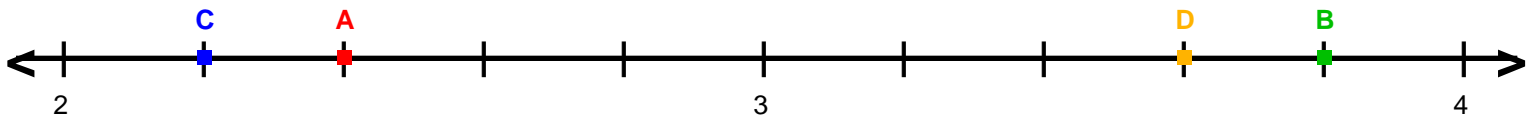
A = _____ B = _____ C = _____ D = _____



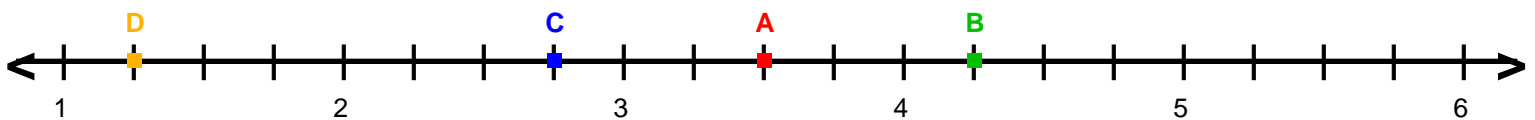
A = _____ B = _____ C = _____ D = _____



A = _____ B = _____ C = _____ D = _____



A = _____ B = _____ C = _____ D = _____



A = _____ B = _____ C = _____ D = _____

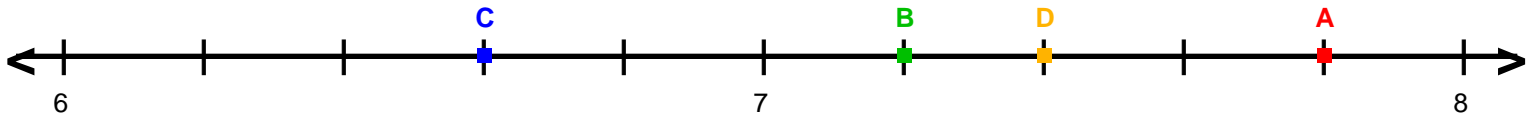
Name : _____

Score : _____

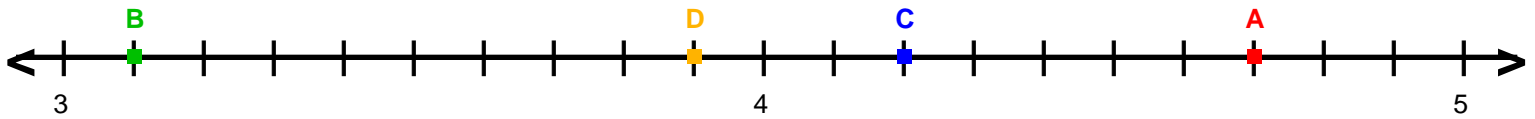
Teacher : _____

Date : _____

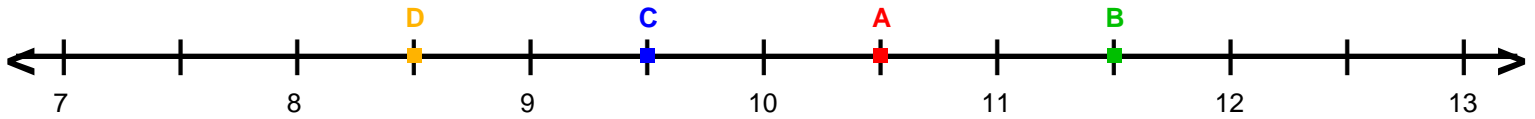
Decimal Numbers on Number Lines



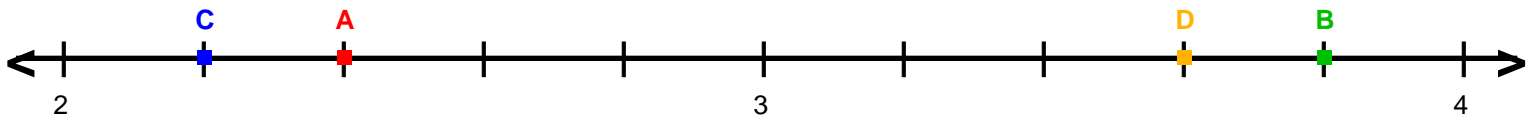
A = 7.8 B = 7.2 C = 6.6 D = 7.4



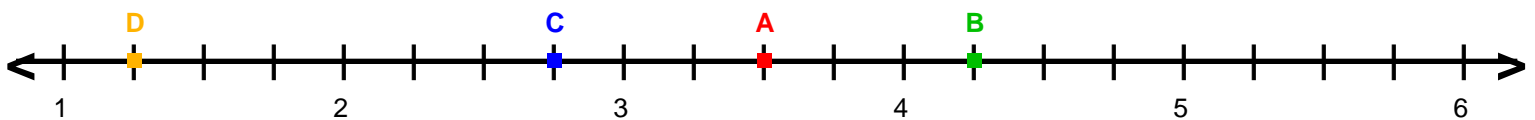
A = 4.7 B = 3.1 C = 4.2 D = 3.9



A = 10.5 B = 11.5 C = 9.5 D = 8.5



A = 2.4 B = 3.8 C = 2.2 D = 3.6



A = 3.5 B = 4.25 C = 2.75 D = 1.25