

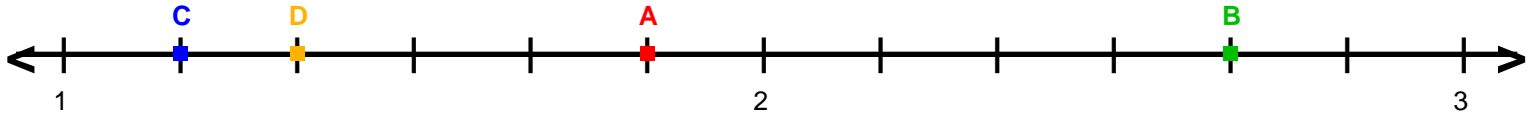
Name : _____

Score : _____

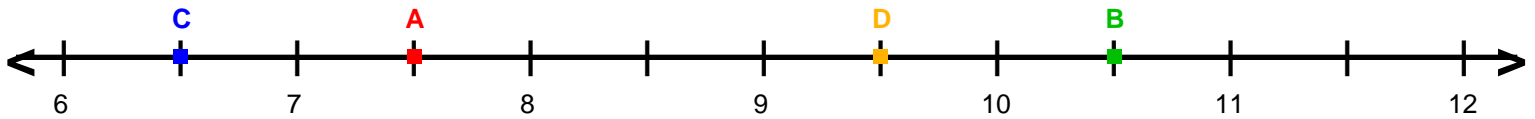
Teacher : _____

Date : _____

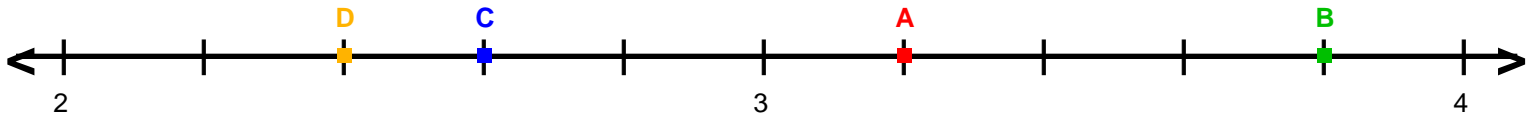
Mixed Numbers on Number Lines



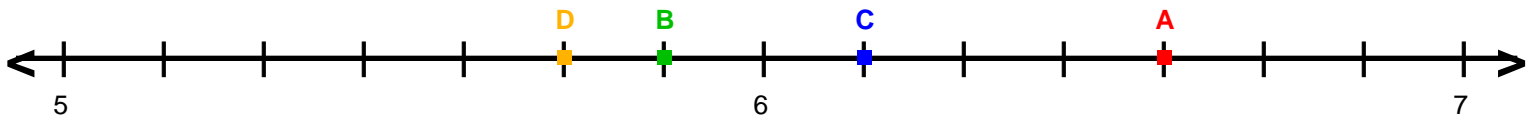
A = _____ B = _____ C = _____ D = _____



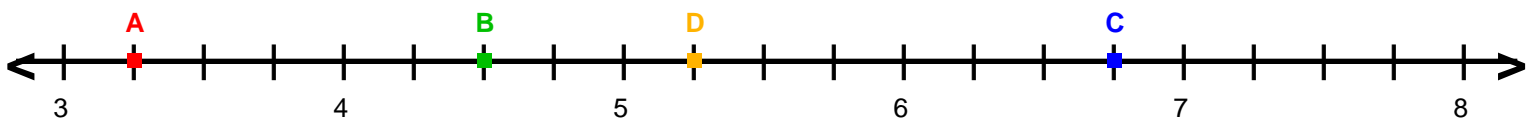
A = _____ B = _____ C = _____ D = _____



A = _____ B = _____ C = _____ D = _____



A = _____ B = _____ C = _____ D = _____



A = _____ B = _____ C = _____ D = _____



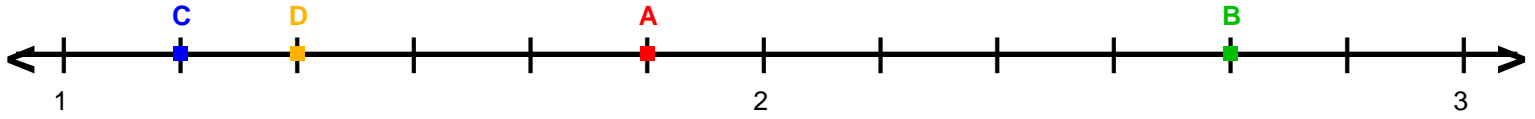
Name : _____

Score : _____

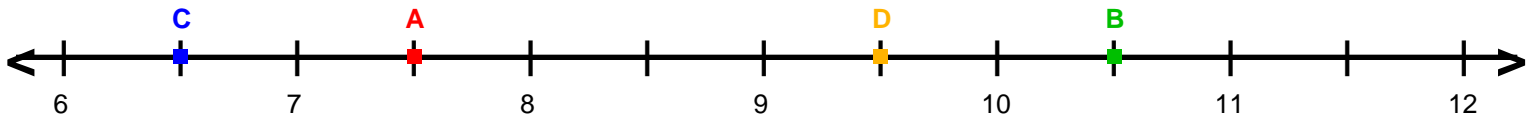
Teacher : _____

Date : _____

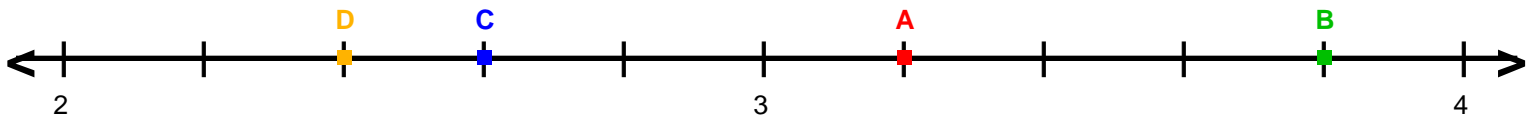
Mixed Numbers on Number Lines



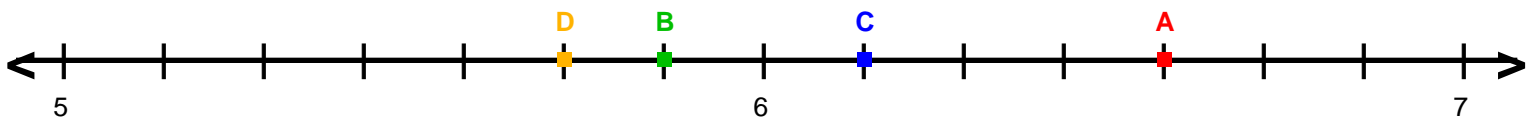
$A = 1 \frac{5}{6}$ $B = 2 \frac{2}{3}$ $C = 1 \frac{1}{6}$ $D = 1 \frac{1}{3}$



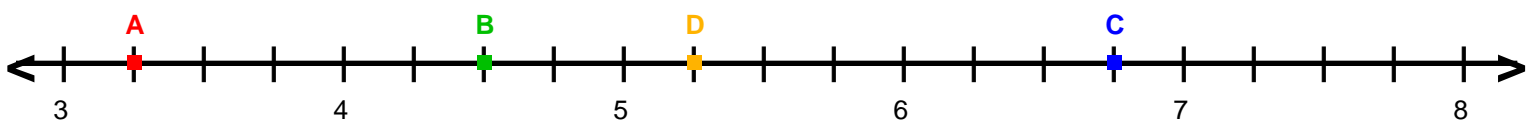
$A = 7 \frac{1}{2}$ $B = 10 \frac{1}{2}$ $C = 6 \frac{1}{2}$ $D = 9 \frac{1}{2}$



$A = 3 \frac{1}{5}$ $B = 3 \frac{4}{5}$ $C = 2 \frac{3}{5}$ $D = 2 \frac{2}{5}$



$A = 6 \frac{4}{7}$ $B = 5 \frac{6}{7}$ $C = 6 \frac{1}{7}$ $D = 5 \frac{5}{7}$



$A = 3 \frac{1}{4}$ $B = 4 \frac{1}{2}$ $C = 6 \frac{3}{4}$ $D = 5 \frac{1}{4}$

