
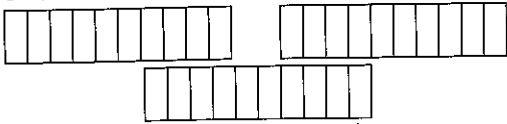


FRACTIONS



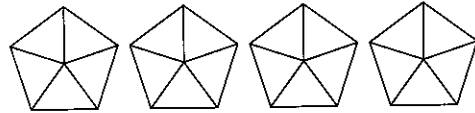
1 Shade 2 wholes and 5 extra parts.



What number is represented?

_____ (in words) (symbol)

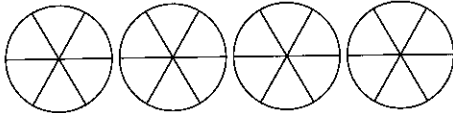
2 Shade 2 wholes and 4 extra parts.



What number is represented?

_____ (in words) (symbol)

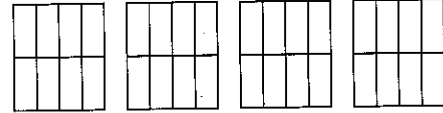
3 Shade 3 wholes and 2 extra parts.



What number is represented?

_____ (in words) (symbol)

4 Shade 2 wholes and 1 extra part.



What number is represented?

_____ (in words) (symbol)

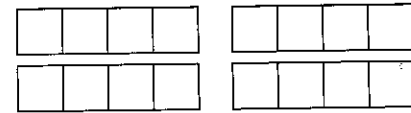
5 Shade 4 wholes and no extra parts.



What number is represented?

_____ (in words) (symbol)

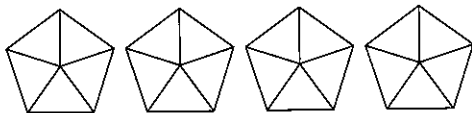
6 Shade 3 wholes and 1 extra part.



What number is represented?

_____ (in words) (symbol)

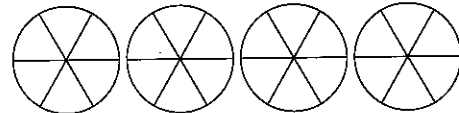
7 Shade 1 whole and 3 extra parts.



What number is represented?

_____ (in words) (symbol)

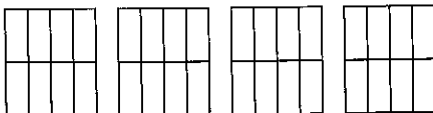
8 Shade 2 wholes and 4 extra parts.



What number is represented?

_____ (in words) (symbol)

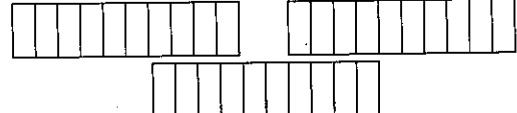
9 Shade 3 wholes and five extra parts.



What number is represented?

_____ (in words) (symbol)

10 Shade 1 whole and 9 extra parts.



What number is represented?

_____ (in words) (symbol)

6

Reviewing fractions to tenths
TIB pp. 47-8, BLM pp. 2-3

